













1 Use Maths-Pro to measure the length of each line to the nearest centimetre.

- (a) 
- (b) 
- (c) 
- (d) 
- (e) 
- (f) 

2 Use Maths-Pro to measure the length of each line to the nearest millimetre.

- (a) 
- (b) 
- (c) 
- (d) 
- (e) 
- (f) 

3 Measure the perimeter of each shape in millimetres.

